

True or False



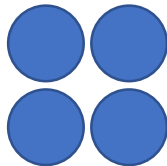
Describe and continue a sequence given diagrammatically

True


1st term




2nd term



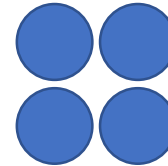
3rd term




1st term



2nd term



3rd term



The rule could be add 2 or multiply by 2