


Understand and use factors

- 1 The array shows that 3 and 8 are factors of 24

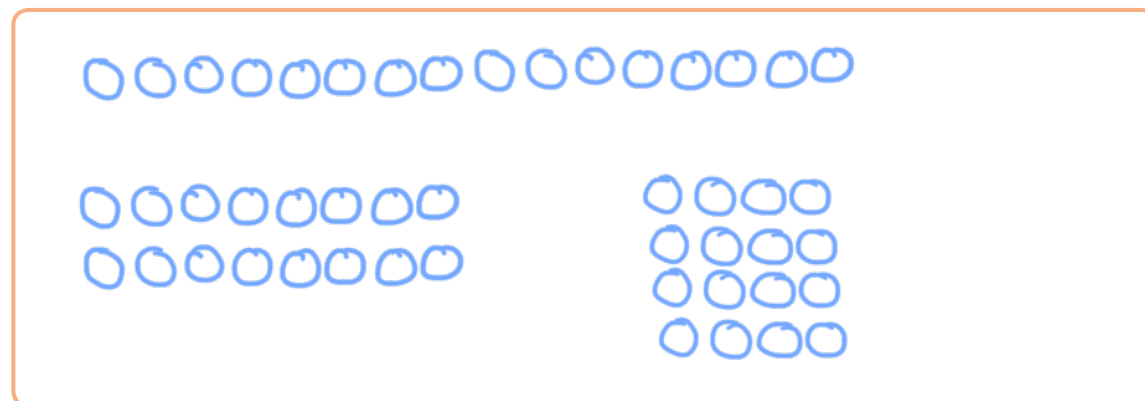


- a) Use counters to find other factors of 24
List your answers.

1, 2, 3, 4, 6, 8, 12, 24

- b) Use counters to explain why 5 is not a factor of 24
Discuss your findings with a partner.

- 2 a) Draw all of the arrays that you can make using 16 counters.



- b) Use your arrays to list all the factors of 16

1, 2, 4, 8, 16

- 3 a) Draw all of the arrays that you can make using 7 counters.



- b) What does your answer to part a) tell you about the number 7?

It is a prime number.

- 4 Complete the factor pairs for 20

1 and 20

2 and 10

4 and 5

Are there any more? How do you know?

- 5 Find all the factors of these numbers.

- a) 25

1, 5, 25


- b) 18

1, 2, 3, 6, 9, 18

- c) 30

1, 2, 3, 5, 6, 10, 15, 30

6



$4.5 \times 2 = 9$, so 4.5 must be a factor of 9

Is Annie correct? No

Explain your reasoning.

7

Filip is finding the factors of 60

He finds the following factors by halving and doubling the numbers in the previous factor pair.

60 and 1

30 and 2

15 and 4

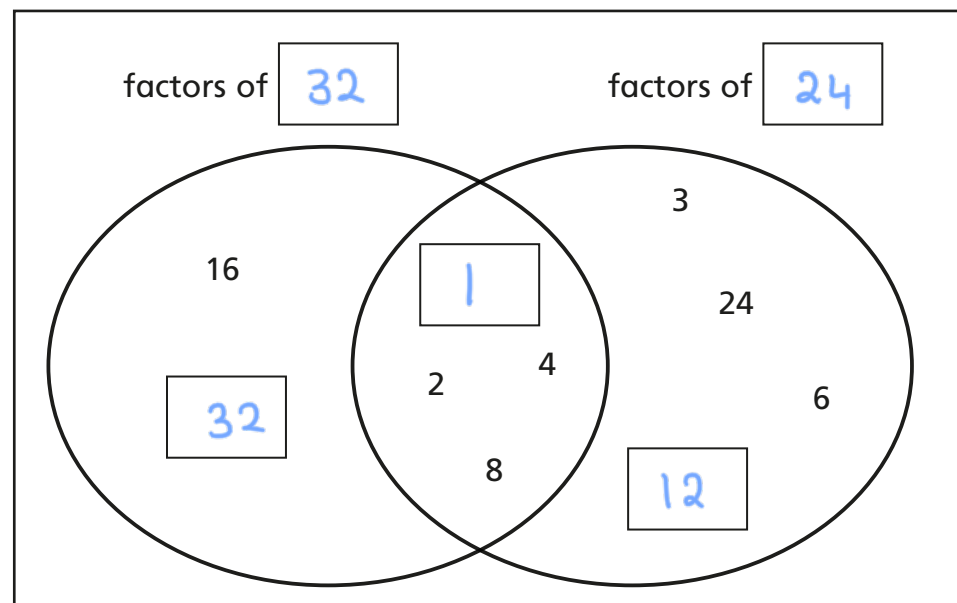
Filip thinks he has found all the factors of 60 because he can't halve 15

Do you agree with Filip? No

Explain why.

8

a) Complete the Venn diagram.



b) What are the common factors shown in the Venn diagram?

1, 2, 4, 8

c) What is the highest common factor shown in the Venn diagram?

8

9

Find the common factors of these pairs of numbers.

State the highest common factor.

a) 15 and 35

The common factors of 15 and 35 are 1, 5

The highest common factor is 5

b) 100 and 40

The common factors of 100 and 40 are 1, 2, 4, 5, 10, 20

The highest common factor is 20

c) 48 and 32

The common factors of 48 and 32 are 1, 2, 4, 8, 16

The highest common factor is 16